

**CMSC330 Fall 2016 Midterm #2**  
**2:00pm/3:30pm**  
**Solution**

**Instructions**

1. Do not start this test until you are told to do so!
2. You have 75 minutes to take this midterm.
3. This exam has a total of 100 points, so allocate 45 seconds for each point.
4. This is a closed book exam. No notes or other aids are allowed.
5. Answer short answer questions concisely in one or two sentences.
6. For partial credit, show all of your work and clearly indicate your answers.
7. Write neatly. Credit cannot be given for illegible answers.

|   | Problem                       | Score |
|---|-------------------------------|-------|
| 1 | Finite Automata               | /20   |
| 2 | Context Free Grammars         | /16   |
| 3 | Parsing                       | /8    |
| 4 | OCaml                         | /20   |
| 5 | Programming Language Concepts | /12   |
| 6 | Operational Semantics         | /10   |
| 7 | Lambda Calculus               | /14   |
|   | Total                         | /100  |

**1. Finite Automata (20 pts)**

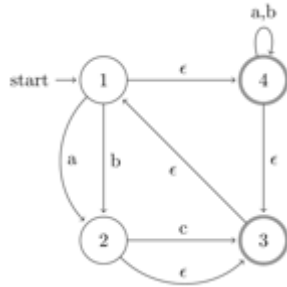
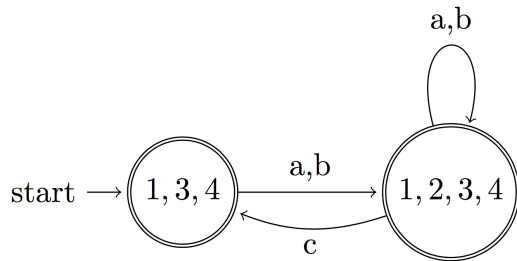


Figure 1: NFA

A. (5 pts) Convert the NFA in Figure 1 to a DFA.

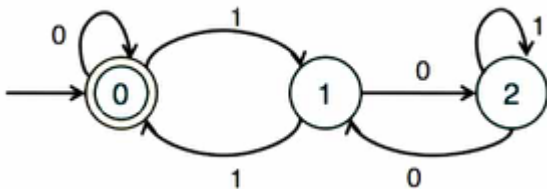


B. (5 pts) Write a regular expression that accepts the same language as the NFA shown in Figure 1.

- $((a|b)^* | ((a|b)+c^?)^*)^*$
- $((a|b)+c^?)^*$
- $(a|b|ac|bc)^*$
- $(ac^?|bc^?)^*$

C. (5 pts) Construct a DFA or NFA that accepts the set of strings over {a, b} that contain exactly two b's.

D. (5 pts) Reduce the following DFA to Regular Expression. (Hint: delete states 2, 1, and 0 in that order.)



01\*0  
0\*(1

## 2. Context Free Grammars (16 pts)

A. (3 pts) The following context-free grammar generates all strings of the form  $a^x b^y$  for some  $x$  and  $y$ :

$S \rightarrow aT$   
 $T \rightarrow aTbb \mid \varepsilon$

Define an equation relating  $x$  and  $y$ .

**Solution:**  $y = 2(x - 1)$

B. (6 pts) Give a context-free grammar for binary number expressions involving  $\&$ ,  $+$ , and  $\sim$  (and, or, not)

- 1) Order of precedence (highest to lowest):  $\sim$ ,  $\&$ ,  $+$
- 2) Associativity for  $\&$  and  $+$  is left,  $\sim$  is unary
- 3) Parenthesis should be supported
- 4) Binary numbers can start with 0's (1 and 01 are valid)

**Solution:**

$S \rightarrow S+T \mid T$   
 $T \rightarrow T\&U \mid U$   
 $U \rightarrow \sim V \mid V$  (or  $U \rightarrow \sim U \mid V$ )  
 $V \rightarrow B \mid (S)$   
 $B \rightarrow 0C \mid 1C$   
 $C \rightarrow 0C \mid 1C \mid \varepsilon$

C. (4 pts) Let  $G$  be the context-free grammar

$$S \rightarrow aS \mid Sb \mid SS \mid ab$$

Give a regular expression for the language of  $G$ . Prove that  $G$  is ambiguous. Then give an ambiguous grammar that generates the same language as  $G$ .

**Model solution.** A regular expression for the language of  $G$  is  $(a^+b^+)^+$ . There are two leftmost derivations of  $aabb$ , so the grammar is ambiguous:

$$S \Rightarrow aS \Rightarrow aSb \Rightarrow aabb$$

$$S \Rightarrow bS \Rightarrow aSb \Rightarrow aabb$$

An unambiguous context-free grammar generating  $(a^+b^+)^+$  can be obtained by eliminating the left-recursive productions:

$$S \rightarrow aS \mid aA$$

$$A \rightarrow bA \mid bS \mid b$$

Note that  $a(a \mid b)^+b$  is equivalent to  $(a^+b^+)^+$ .

D. (3 pts) Give a context-free grammar  $G$  that generates the language  $L = L_1 \cup L_2$ , where

$$L_1 = \{a^n b^n c^m : n, m > 0\}$$

$$L_2 = \{a^n b^m c^m : n, m > 0\}$$

**Model solution.** The following context-free grammar generates  $L$ :

$$S \rightarrow XC \mid AY$$

$$X \rightarrow aXb \mid ab$$

$$Y \rightarrow bYc \mid bc$$

$$C \rightarrow cC \mid c$$

$$A \rightarrow aA \mid a$$

### 3. Parsing (8 pts)

A. (3 pts) Consider the following context-free grammar:

$$S \rightarrow (A) \mid a$$

$$A \rightarrow S B$$

$$B \rightarrow ; S B \mid \varepsilon$$

Compute the first sets of each non-terminal

FIRST(S) = {(, a}  
 FIRST(A) = {(, a}  
 FIRST(B) = {;, ε}

B. (5 pts) Consider the following CFG.

S → E; S | E

E → T O E | T

T → n

O → + | -

Draw a parse tree for the string "n+n;n-n"

Answer:

|  |   |   |   |   |   |   |   |  |  |
|--|---|---|---|---|---|---|---|--|--|
|  |   |   |   | S |   |   |   |  |  |
|  |   | E |   | ; |   | S |   |  |  |
|  | T | O | E |   |   | E |   |  |  |
|  | n | + | T |   | T | O | E |  |  |
|  |   |   | n |   | n | - | T |  |  |
|  |   |   |   |   |   |   | n |  |  |

## 4. OCaml (20 pts)

A. (8 points) Write a function **combine** that, given a list of potentially overlapping intervals (pairs) sorted by the first element of each pair, return a list with the overlapping pairs from the original list having been combined.

combine [(1,3);(3,5);(7,9)] = [(1,5);(7,9)]

combine [(1,3);(4,8);(5,9)] = [(1,3);(4,9)]

```
Let combine l =
```

```
let rec squash s e li = match li with
| [] -> [(s,e)]
| (p,q)::t -> if p <= e then
    if q > e then (squash s q t)
```

```

        else (squash s e t)
            else (s,e)::(squash p q t)
in match l with
(x,y)::t -> squash x y l

```

B. (8 points) Write a function **rotate** that, given a list and a positive integer  $k$ , rotate the list  $k$  elements to the left. **You are allowed to use “@” to merge lists.**

rotate 2 [1;2;3;4;5] = [3;4;5;1;2]

rotate 0 [1;2;3;4;5] = [1;2;3;4;5]

rotate 8 [1;2;3;4;5] = [3;4;5;1;2]

2 points: base case

2 points: shifting the list

2 points: putting the list together correctly

2 points: syntax

C. (4 points) Using **fold** and/or **map**, write a function to compute the sum of squares each item in a list of **floating point** values.

square\_sum [1.5;4.0;2.0] = 22.25

square\_sum [1.0;2.0;3.0] = 14.00

## 5. Programming Language Concepts (12 pts)

A. (4 pts) The following code calculates  $1+2+3+4\dots n$ . It is not tail recursive. Rewrite the function `sum`, so that it is tail recursive. (You are allowed to add nested helper functions)

```
let rec sum n = if n=1 then 1 else n + sum(n-1)
```

```
let rec sum n =
```

```
    let rec sumHelp n acc = if n = 0 then acc else sumHelp (n-1) (n+acc) in
```

```

sumHelp n 0
;;

```

B. (2 pts) Circle **all** of the statements that apply to the following OCaml pseudocode:  
 let x = E1 in let x = E2 in E3

- a) In the scope of E1, x is bound
- b) In the scope of E2, x is bound
- c) The pseudocode contains an instance of shadowing
- d) The code is invalid, as there are multiple declarations of x

C. (1 pts) Which of the following statements is **NOT** true about a language with first-class functions?

- a) Functions can be passed in as arguments to other functions
- b) Functions can be returned as the result of calling other functions
- c) The language does not include imperative features
- d) The language treats functions on the same level as other data types

D. (1 pts) The fixed-point combinator is used to achieve recursion.

E. (1 pts) Static type checking occurs during a program's compilation.

F. (1 pts) True / **False** Statically typed languages are type safe.

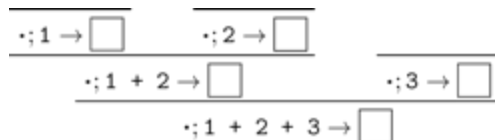
G. (2 pts) True / False I voted.

## 6. Operational Semantics (10 pts)

Use the language defined by the context-free grammar

and the operational semantics

to fill in the blank boxes in the following two derivations:



$$\frac{\frac{\frac{\cdot; 10 \rightarrow 10}{\cdot; 20 \rightarrow 20} \quad \frac{\frac{\frac{\cdot; x \rightarrow 20}{\cdot; y \rightarrow 10}}{\cdot; x + y \rightarrow 30}}{\cdot; \text{let } x = 20 \text{ in } x + y \rightarrow 30}}{\cdot; \text{let } y = 10 \text{ in let } x = 20 \text{ in } x + y \rightarrow 30}$$

Solution:

$$\frac{\frac{\frac{\cdot; 1 \rightarrow 1}{\cdot; 1 + 2 \rightarrow 3} \quad \frac{\cdot; 2 \rightarrow 2}{\cdot; 3 \rightarrow 3}}{\cdot; 1 + 2 + 3 \rightarrow 6} \quad \frac{\frac{\frac{\frac{\frac{\cdot; y:10, x:20}{\cdot; x \rightarrow 20}}{\cdot; y:10, x:20}}{\cdot; y \rightarrow 10}}{\cdot; y:10, x:20}}{\cdot; y:10, x:20}}{\cdot; \text{let } x = 20 \text{ in } x + y \rightarrow 30}}{\cdot; 10 \rightarrow 10} \quad \frac{\cdot; \text{let } y = 10 \text{ in let } x = 20 \text{ in } x + y \rightarrow 30}$$

## 7. Lambda Calculus (14 pts)

A. Alpha Equivalence (2 point each): For each pair of expressions, determine if they are alpha equivalent. Circle "Equivalent" or "Not Equivalent".

$\lambda f. \lambda x. f(f x y) y$   
 $\lambda f. \lambda x. f(f x z) z$

Equivalent

**Not Equivalent**

$\lambda a. \lambda b. (\lambda a. a b) (\lambda b. b b) a$   
 $\lambda a. \lambda x. (\lambda a. a x) (\lambda b. x x) a$

Equivalent

**Not Equivalent**

B. Beta Reduction: Reduce each expression to normal form. If it reduces infinitely, state that it does not reduce.



(2 points)  $\lambda x. (\lambda z. z z x) a b$

**$\lambda x. a a x b$**

(3 points)  $(\lambda x. \lambda y. y x y) (a b) (\lambda m. a m)$

**$a (a b) (\lambda m. a m)$**

C. Operations on Church Numerals (5 points): Given the following definitions, prove that  $\text{mult } 2 * 0 = 0$ . Show all of your beta reductions and alpha conversions for full points.

$0 = \lambda f. \lambda y. y$                        $2 = \lambda f. \lambda y. f (f y)$   
 $\text{mult} = \lambda M. \lambda N. \lambda f. M (N f)$

**Solution:**  $\lambda f. ((\lambda a. \lambda b. a (a b)) ((\lambda c. \lambda d. d) f))$   
- $\beta$ ->  $\lambda f. ((\lambda \underline{a}. \lambda b. \underline{a} (\underline{a} b)) (\lambda \underline{d}. \underline{d}))$   
- $\beta$ ->  $\lambda f. (\lambda b. (\lambda \underline{d}. \underline{d})) ((\lambda \underline{d}. \underline{d}) b)$   
- $\beta$ ->  $\lambda f. (\lambda b. ((\lambda \underline{d}. \underline{d}) b))$   
- $\beta$ ->  $\lambda f. \lambda b. b$   
- $\alpha$ ->  $= \lambda f. \lambda y. y = 0$