

BILL, RECORD LECTURE!!!!

BILL RECORD LECTURE!!!

Euclidean Ramsey Theory Chromatic Number of the Plane

Exposition by William Gasarch

May 8, 2026

Ramsey Theory VS Euclidean Ramsey Theory

Ramsey Theory VS Euclidean Ramsey Theory

Examples of Ramsey Theory:

Ramsey Theory VS Euclidean Ramsey Theory

Examples of Ramsey Theory:

1) $(\forall k)(\exists n)[\forall \text{COL}: \binom{[n]}{2} \rightarrow [2] \quad \exists \text{ a } k\text{-homog set}]$.

Ramsey Theory VS Euclidean Ramsey Theory

Examples of Ramsey Theory:

1) $(\forall k)(\exists n)[\forall \text{COL}: \binom{[n]}{2} \rightarrow [2] \quad \exists \text{ a } k\text{-homog set}]$.

2) $(\forall k)(\exists n)[\forall \text{COL}: [n] \rightarrow [2] \quad \exists \text{ a mono } k\text{-AP}]$.

Ramsey Theory VS Euclidean Ramsey Theory

Examples of Ramsey Theory:

1) $(\forall k)(\exists n)[\forall \text{COL}: \binom{[n]}{2} \rightarrow [2] \quad \exists \text{ a } k\text{-homog set}]$.

2) $(\forall k)(\exists n)[\forall \text{COL}: [n] \rightarrow [2] \quad \exists \text{ a mono } k\text{-AP}]$.

3) $(\exists n)[\forall \text{COL}: [n] \times [n] \rightarrow [2] \quad \exists \text{ mono square}]$.

Ramsey Theory VS Euclidean Ramsey Theory

Examples of Ramsey Theory:

1) $(\forall k)(\exists n)[\forall \text{COL}: \binom{[n]}{2} \rightarrow [2] \quad \exists \text{ a } k\text{-homog set}]$.

2) $(\forall k)(\exists n)[\forall \text{COL}: [n] \rightarrow [2] \quad \exists \text{ a mono } k\text{-AP}]$.

3) $(\exists n)[\forall \text{COL}: [n] \times [n] \rightarrow [2] \quad \exists \text{ mono square}]$.

Note that

Ramsey Theory VS Euclidean Ramsey Theory

Examples of Ramsey Theory:

1) $(\forall k)(\exists n)[\forall \text{COL}: \binom{[n]}{2} \rightarrow [2] \quad \exists \text{ a } k\text{-homog set}]$.

2) $(\forall k)(\exists n)[\forall \text{COL}: [n] \rightarrow [2] \quad \exists \text{ a mono } k\text{-AP}]$.

3) $(\exists n)[\forall \text{COL}: [n] \times [n] \rightarrow [2] \quad \exists \text{ mono square}]$.

Note that

A) The objects we are coloring are **discrete**.

Ramsey Theory VS Euclidean Ramsey Theory

Examples of Ramsey Theory:

1) $(\forall k)(\exists n)[\forall \text{COL}: \binom{[n]}{2} \rightarrow [2] \quad \exists \text{ a } k\text{-homog set}]$.

2) $(\forall k)(\exists n)[\forall \text{COL}: [n] \rightarrow [2] \quad \exists \text{ a mono } k\text{-AP}]$.

3) $(\exists n)[\forall \text{COL}: [n] \times [n] \rightarrow [2] \quad \exists \text{ mono square}]$.

Note that

A) The objects we are coloring are **discrete**.

In Euclidean Ramsey Theory we will be coloring the Plane or \mathbb{R}^d .

Ramsey Theory VS Euclidean Ramsey Theory

Examples of Ramsey Theory:

1) $(\forall k)(\exists n)[\forall \text{COL}: \binom{[n]}{2} \rightarrow [2] \quad \exists \text{ a } k\text{-homog set}]$.

2) $(\forall k)(\exists n)[\forall \text{COL}: [n] \rightarrow [2] \quad \exists \text{ a mono } k\text{-AP}]$.

3) $(\exists n)[\forall \text{COL}: [n] \times [n] \rightarrow [2] \quad \exists \text{ mono square}]$.

Note that

A) The objects we are coloring are **discrete**.

In Euclidean Ramsey Theory we will be coloring the Plane or \mathbb{R}^d .

B) We do not care about the geometric size. For example, the Square can be any size.

Ramsey Theory VS Euclidean Ramsey Theory

Examples of Ramsey Theory:

1) $(\forall k)(\exists n)[\forall \text{COL}: \binom{[n]}{2} \rightarrow [2] \quad \exists \text{ a } k\text{-homog set}]$.

2) $(\forall k)(\exists n)[\forall \text{COL}: [n] \rightarrow [2] \quad \exists \text{ a mono } k\text{-AP}]$.

3) $(\exists n)[\forall \text{COL}: [n] \times [n] \rightarrow [2] \quad \exists \text{ mono square}]$.

Note that

A) The objects we are coloring are **discrete**.

In Euclidean Ramsey Theory we will be coloring the Plane or \mathbb{R}^d .

B) We do not care about the geometric size. For example, the Square can be any size.

In Euclidean Ramsey Theory we will be seek an object of a certain size, for example the unit square.

For All 2-Colorings of the Plane...

Thm $\forall \text{COL}: \mathbb{R}^2 \rightarrow [2] \exists 2 \text{ points, same color, 1 inch apart.}$

For All 2-Colorings of the Plane...

Thm $\forall \text{COL}: \mathbb{R}^2 \rightarrow [2] \exists 2 \text{ points, same color, 1 inch apart.}$

Discuss Try to prove it, what are your thoughts.

For All 2-Colorings of the Plane...

Thm $\forall \text{COL}: \mathbb{R}^2 \rightarrow [2] \exists 2 \text{ points, same color, 1 inch apart.}$

Discuss Try to prove it, what are your thoughts.

Proof on the next page.

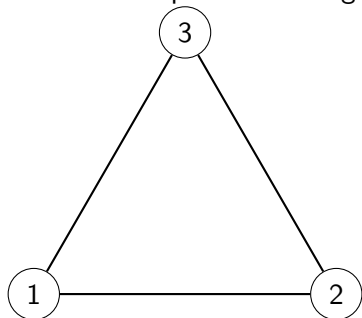
For All 2-Colorings of The Plane...

For All 2-Colorings of The Plane...

Look at an equilateral triangle in the plane

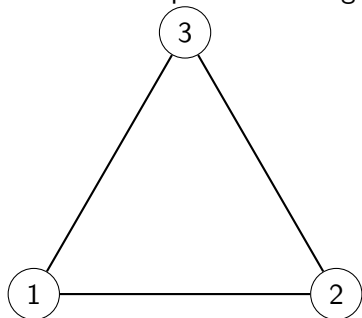
For All 2-Colorings of The Plane...

Look at an equilateral triangle in the plane



For All 2-Colorings of The Plane...

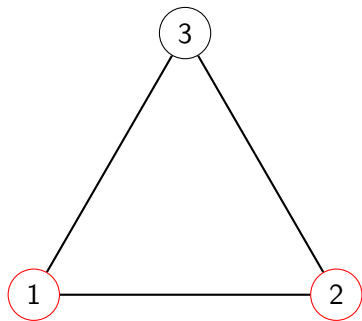
Look at an equilateral triangle in the plane



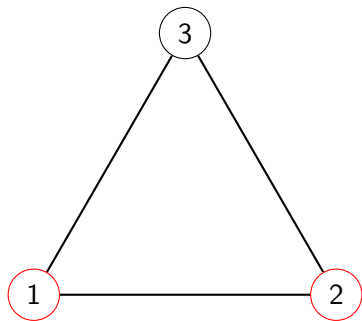
3 vertices and 2 colors. So 2 of the vertices are the same color.

For All 2-Colorings of The Plane...

For All 2-Colorings of The Plane...



For All 2-Colorings of The Plane...



Vertices 1 and 2 are an inch apart.

Chromatic Number of the Plane

Consider the graph $G = (V, E)$ where

Chromatic Number of the Plane

Consider the graph $G = (V, E)$ where
 $V = \mathbb{R}^2$

Chromatic Number of the Plane

Consider the graph $G = (V, E)$ where

$$V = \mathbb{R}^2$$

$$E = \{(x, y) : d(x, y) = 1\}.$$

Chromatic Number of the Plane

Consider the graph $G = (V, E)$ where

$$V = \mathbb{R}^2$$

$$E = \{(x, y) : d(x, y) = 1\}.$$

Def χ is the chromatic number of this graph.

Chromatic Number of the Plane

Consider the graph $G = (V, E)$ where

$$V = \mathbb{R}^2$$

$$E = \{(x, y) : d(x, y) = 1\}.$$

Def χ is the chromatic number of this graph.

The Theorem

Thm $\forall \text{COL} : \mathbb{R}^2 \rightarrow [2] \exists 2 \text{ points, same color, 1 inch apart.}$

Can be rephrased as

Chromatic Number of the Plane

Consider the graph $G = (V, E)$ where

$$V = \mathbb{R}^2$$

$$E = \{(x, y) : d(x, y) = 1\}.$$

Def χ is the chromatic number of this graph.

The Theorem

Thm $\forall \text{COL} : \mathbb{R}^2 \rightarrow [2] \exists 2 \text{ points, same color, 1 inch apart.}$

Can be rephrased as

Thm $\chi \geq 3.$

Chromatic Number of the Plane

Consider the graph $G = (V, E)$ where

$$V = \mathbb{R}^2$$

$$E = \{(x, y) : d(x, y) = 1\}.$$

Def χ is the chromatic number of this graph.

The Theorem

Thm $\forall \text{COL} : \mathbb{R}^2 \rightarrow [2] \exists 2 \text{ points, same color, 1 inch apart.}$

Can be rephrased as

Thm $\chi \geq 3.$

We investigate what χ can be.

What about 3-Colorings of The Plane?

Vote

What about 3-Colorings of The Plane?

Vote

1) $\forall \text{ COL: } \mathbb{R}^2 \rightarrow [3] \exists 2 \text{ points, same color, 1 inch apart.}$
(So $\chi \geq 4$)

What about 3-Colorings of The Plane?

Vote

1) $\forall \text{ COL: } \mathbb{R}^2 \rightarrow [3] \exists 2 \text{ points, same color, 1 inch apart.}$

(So $\chi \geq 4$)

2) $\exists \text{ COL: } \mathbb{R}^2 \rightarrow [3] \text{ no 2 points, same color, 1 inch apart.}$

(So $\chi = 3.$)

What about 3-Colorings of The Plane?

Vote

1) $\forall \text{ COL: } \mathbb{R}^2 \rightarrow [3] \exists 2 \text{ points, same color, 1 inch apart.}$

(So $\chi \geq 4$)

2) $\exists \text{ COL: } \mathbb{R}^2 \rightarrow [3] \text{ no 2 points, same color, 1 inch apart.}$

(So $\chi = 3.$)

3) Unknown to Science!

What about 3-Colorings of The Plane?

Vote

1) $\forall \text{ COL: } \mathbb{R}^2 \rightarrow [3] \exists 2 \text{ points, same color, 1 inch apart.}$

(So $\chi \geq 4$)

2) $\exists \text{ COL: } \mathbb{R}^2 \rightarrow [3] \text{ no 2 points, same color, 1 inch apart.}$

(So $\chi = 3.$)

3) Unknown to Science!

Answer on next slide

For All 3-Colorings of The Plane...

Thm $\forall \text{COL}: \mathbb{R}^2 \rightarrow [3] \exists 2 \text{ points, same color, 1 inch apart.}$
(So $\chi \geq 4.$)

For All 3-Colorings of The Plane...

For All 3-Colorings of The Plane...

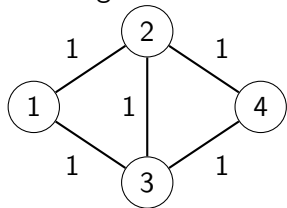
Assume COL is a proper 3-coloring of the plane.

For All 3-Colorings of The Plane...

Assume COL is a proper 3-coloring of the plane.
Glue together two unit equilateral triangles:

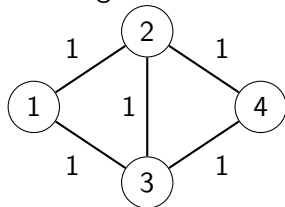
For All 3-Colorings of The Plane...

Assume COL is a proper 3-coloring of the plane.
Glue together two unit equilateral triangles:



For All 3-Colorings of The Plane...

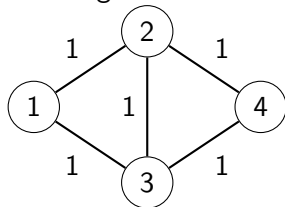
Assume COL is a proper 3-coloring of the plane.
Glue together two unit equilateral triangles:



$\text{COL}(1) = \mathbf{R}$, so $\text{COL}(2) \neq \mathbf{R}$ and $\text{COL}(3) \neq \mathbf{R}$.

For All 3-Colorings of The Plane...

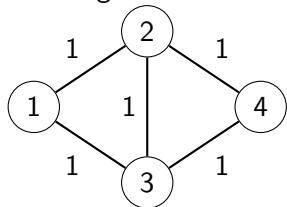
Assume COL is a proper 3-coloring of the plane.
Glue together two unit equilateral triangles:



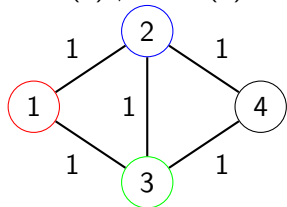
$\text{COL}(1) = \mathbf{R}$, so $\text{COL}(2) \neq \mathbf{R}$ and $\text{COL}(3) \neq \mathbf{R}$.
 $\text{COL}(2) \neq \text{COL}(3)$ so $\text{COL}(2) = \mathbf{B}$ and $\text{COL}(3) = \mathbf{G}$.

For All 3-Colorings of The Plane...

Assume COL is a proper 3-coloring of the plane.
Glue together two unit equilateral triangles:

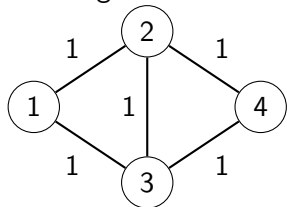


$\text{COL}(1) = \mathbf{R}$, so $\text{COL}(2) \neq \mathbf{R}$ and $\text{COL}(3) \neq \mathbf{R}$.
 $\text{COL}(2) \neq \text{COL}(3)$ so $\text{COL}(2) = \mathbf{B}$ and $\text{COL}(3) = \mathbf{G}$.

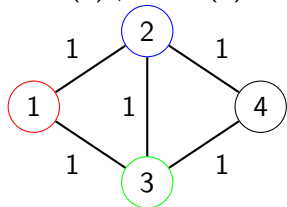


For All 3-Colorings of The Plane...

Assume COL is a proper 3-coloring of the plane.
Glue together two unit equilateral triangles:



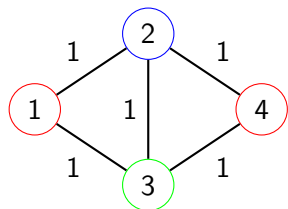
$\text{COL}(1) = \mathbf{R}$, so $\text{COL}(2) \neq \mathbf{R}$ and $\text{COL}(3) \neq \mathbf{R}$.
 $\text{COL}(2) \neq \text{COL}(3)$ so $\text{COL}(2) = \mathbf{B}$ and $\text{COL}(3) = \mathbf{G}$.



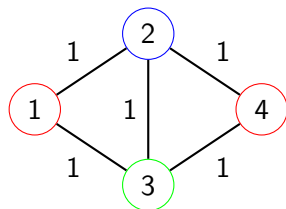
Hence $\text{COL}(4) = \mathbf{R}$.

For All 3-Colorings of The Plane...

For All 3-Colorings of The Plane...

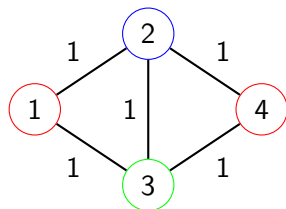


For All 3-Colorings of The Plane...



Distance from 1 to 4 is $\sqrt{3}$.

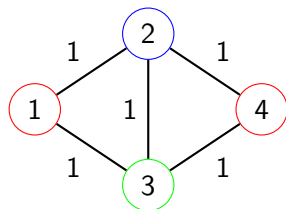
For All 3-Colorings of The Plane...



Distance from 1 to 4 is $\sqrt{3}$.

Upshot 1 If p, q are $\sqrt{3}$ apart then $\text{COL}(p) = \text{COL}(q)$.

For All 3-Colorings of The Plane...



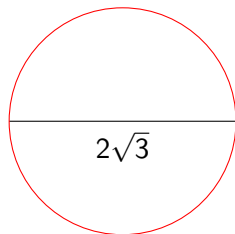
Distance from 1 to 4 is $\sqrt{3}$.

Upshot 1 If p, q are $\sqrt{3}$ apart then $\text{COL}(p) = \text{COL}(q)$.

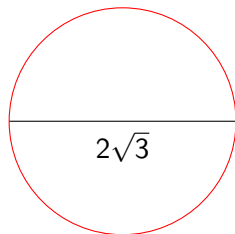
Upshot 2 If $\text{COL}(p) = \mathbf{R}$ then circle of radius $\sqrt{3}$ around p is \mathbf{R} .

R Circle of Diameter $\sqrt{3}$

R Circle of Diameter $\sqrt{3}$

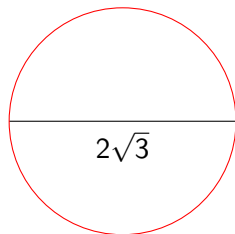


R Circle of Diameter $\sqrt{3}$

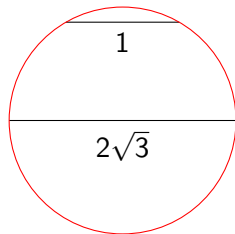


Look at a chord of the circle of length 1.

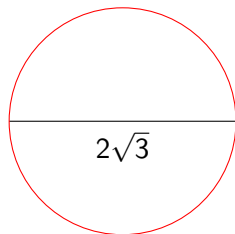
R Circle of Diameter $\sqrt{3}$



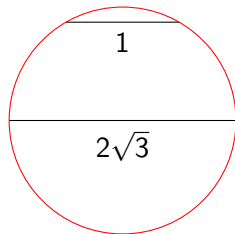
Look at a chord of the circle of length 1.



R Circle of Diameter $\sqrt{3}$



Look at a chord of the circle of length 1.



Endpoints of chord are **R** and an inch apart.

Alternative Proof: The Moser Spindle

Alternative Proof: The Moser Spindle

Recall The proof that $\chi \geq 2$ is to restrict the coloring to a 3-point set, the equilateral triangle.

Alternative Proof: The Moser Spindle

Recall The proof that $\chi \geq 2$ is to restrict the coloring to a 3-point set, the equilateral triangle.

Is there a finite subset of the plane that shows $\chi \geq 3$?

Alternative Proof: The Moser Spindle

Recall The proof that $\chi \geq 2$ is to restrict the coloring to a 3-point set, the equilateral triangle.

Is there a finite subset of the plane that shows $\chi \geq 3$? Yes.

Alternative Proof: The Moser Spindle

Recall The proof that $\chi \geq 2$ is to restrict the coloring to a 3-point set, the equilateral triangle.

Is there a finite subset of the plane that shows $\chi \geq 3$? Yes.
We point to the Wikipedia page of **The Moser Spindle**.

Alternative Proof: The Moser Spindle

Recall The proof that $\chi \geq 2$ is to restrict the coloring to a 3-point set, the equilateral triangle.

Is there a finite subset of the plane that shows $\chi \geq 3$? Yes.

We point to the Wikipedia page of **The Moser Spindle**.

It is a 7-vertex graph drawn in the plane with all sides of length 1.

It is an easy exercise to show that this graph is not 3-colorable.

Alternative Proof: The Moser Spindle

Recall The proof that $\chi \geq 2$ is to restrict the coloring to a 3-point set, the equilateral triangle.

Is there a finite subset of the plane that shows $\chi \geq 3$? Yes.

We point to the Wikipedia page of **The Moser Spindle**.

It is a 7-vertex graph drawn in the plane with all sides of length 1.

It is an easy exercise to show that this graph is not 3-colorable.

https://en.wikipedia.org/wiki/Moser_spindle

Recap 2-Coloring and 3-Coloring the Plane

Recap 2-Coloring and 3-Coloring the Plane

- ▶ There is a 3-point subset of the plane that is NOT 2-colorable.

Recap 2-Coloring and 3-Coloring the Plane

- ▶ There is a 3-point subset of the plane that is NOT 2-colorable.
- ▶ There is a 7-point subset of the plane that is NOT 3-colorable.

What about 4-Colorings of The Plane?

Vote

What about 4-Colorings of The Plane?

Vote

1) $\forall \text{ COL: } \mathbb{R}^2 \rightarrow [4] \exists 2 \text{ points, same color, 1 inch apart.}$
(So $\chi \geq 5.$)

What about 4-Colorings of The Plane?

Vote

1) $\forall \text{ COL: } \mathbb{R}^2 \rightarrow [4] \exists 2 \text{ points, same color, 1 inch apart.}$
(So $\chi \geq 5.$)

2) $\exists \text{ COL: } \mathbb{R}^2 \rightarrow [4] \text{ no 2 points, same color, 1 inch apart.}$
(So $\chi = 4.$)

What about 4-Colorings of The Plane?

Vote

- 1) $\forall \text{ COL: } \mathbb{R}^2 \rightarrow [4] \exists 2 \text{ points, same color, 1 inch apart.}$
(So $\chi \geq 5.$)
- 2) $\exists \text{ COL: } \mathbb{R}^2 \rightarrow [4] \text{ no 2 points, same color, 1 inch apart.}$
(So $\chi = 4.$)
- 3) Unknown to Science!

What about 4-Colorings of The Plane?

Vote

1) $\forall \text{ COL: } \mathbb{R}^2 \rightarrow [4] \exists 2 \text{ points, same color, 1 inch apart.}$
(So $\chi \geq 5.$)

2) $\exists \text{ COL: } \mathbb{R}^2 \rightarrow [4] \text{ no 2 points, same color, 1 inch apart.}$
(So $\chi = 4.$)

3) Unknown to Science!

Answer on next slide

For All 4-Colorings of The Plane...

Thm (Aubrey de Grey, 2018)

$\forall \text{COL}: \mathbb{R}^2 \rightarrow [4] \exists 2 \text{ points, same color, 1 inch apart.}$

(So $\chi \geq 5$.)

For All 4-Colorings of The Plane...

Thm (Aubrey de Grey, 2018)

$\forall \text{COL}: \mathbb{R}^2 \rightarrow [4] \exists 2 \text{ points, same color, 1 inch apart.}$

(So $\chi \geq 5$.)

de Grey did this with a construction of a 1581-vertex unit-distance graph that is not 4-colorable.

For All 4-Colorings of The Plane...

Thm (Aubrey de Grey, 2018)

$\forall \text{COL}: \mathbb{R}^2 \rightarrow [4] \exists 2 \text{ points, same color, 1 inch apart.}$

(So $\chi \geq 5$.)

de Grey did this with a construction of a 1581-vertex unit-distance graph that is not 4-colorable.

As of 2021 this was gotten down to a 509-vertex graph.

For All 4-Colorings of The Plane...

Thm (Aubrey de Grey, 2018)

$\forall \text{COL: } \mathbb{R}^2 \rightarrow [4] \exists 2 \text{ points, same color, 1 inch apart.}$

(So $\chi \geq 5$.)

de Grey did this with a construction of a 1581-vertex unit-distance graph that is not 4-colorable.

As of 2021 this was gotten down to a 509-vertex graph.

So we know that $\chi \geq 5$.

For All 5-Colorings of The Plane...

Vote

For All 5-Colorings of The Plane...

Vote

1) $\forall \text{ COL: } \mathbb{R}^2 \rightarrow [5] \exists 2 \text{ points, same color, 1 inch apart.}$
(So $\chi \geq 6$.)

For All 5-Colorings of The Plane...

Vote

1) $\forall \text{ COL: } \mathbb{R}^2 \rightarrow [5] \exists 2 \text{ points, same color, 1 inch apart.}$

(So $\chi \geq 6.$)

2) $\exists \text{ COL: } \mathbb{R}^2 \rightarrow [5] \text{ no 2 points, same color, 1 inch apart.}$

(So $\chi = 5.$)

For All 5-Colorings of The Plane...

Vote

1) $\forall \text{ COL: } \mathbb{R}^2 \rightarrow [5] \exists 2 \text{ points, same color, 1 inch apart.}$

(So $\chi \geq 6.$)

2) $\exists \text{ COL: } \mathbb{R}^2 \rightarrow [5] \text{ no 2 points, same color, 1 inch apart.}$

(So $\chi = 5.$)

3) Unknown to Science!

For All 5-Colorings of The Plane...

The status of

For All 5-Colorings of The Plane...

The status of

$\forall \text{COL}: \mathbb{R}^2 \rightarrow [5] \exists 2 \text{ points, same color, 1 inch apart.}$

For All 5-Colorings of The Plane...

The status of

$\forall \text{ COL: } \mathbb{R}^2 \rightarrow [5] \exists 2 \text{ points, same color, 1 inch apart.}$

is **Unknown to Science!**

Upper bound on χ

Thm $\chi \leq 7$.

Upper bound on χ

Thm $\chi \leq 7$.

There is a 7-coloring of the plane, so $5 \leq \chi \leq 7$.

Upper bound on χ

Thm $\chi \leq 7$.

There is a 7-coloring of the plane, so $5 \leq \chi \leq 7$.

Here is the 7-coloring:

[https://thatsmaths.com/2022/03/24/
the-chromatic-number-of-the-plane/](https://thatsmaths.com/2022/03/24/the-chromatic-number-of-the-plane/)